



UNIVERSITY OF CAMBRIDGE INTERNATIONAL EXAMINATIONS
International General Certificate of Secondary Education

DEVELOPMENT STUDIES

0453/02

Paper 2

October/November 2011

INSERT

2 hours

READ THESE INSTRUCTIONS FIRST

This Insert contains Figs 1, 2 and 3 for Question 1 and Figs. 4A and 4B for Question 2.
Anything the candidate writes on this Insert will not be marked.

This document consists of **4** printed pages.



Percentage of the population living on less than US\$1 per day

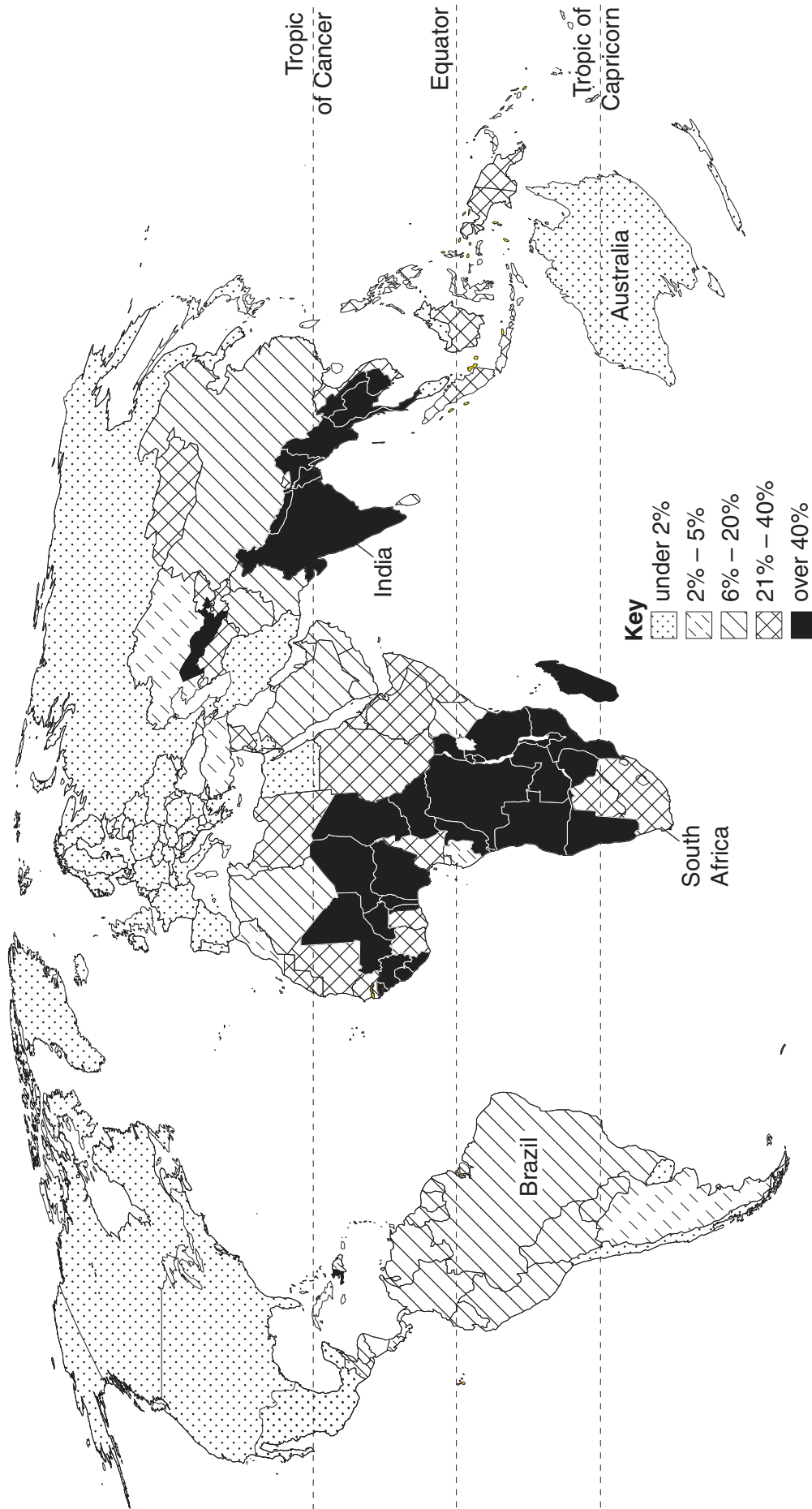


Fig. 1 for Question 1

Indicators of poverty and development

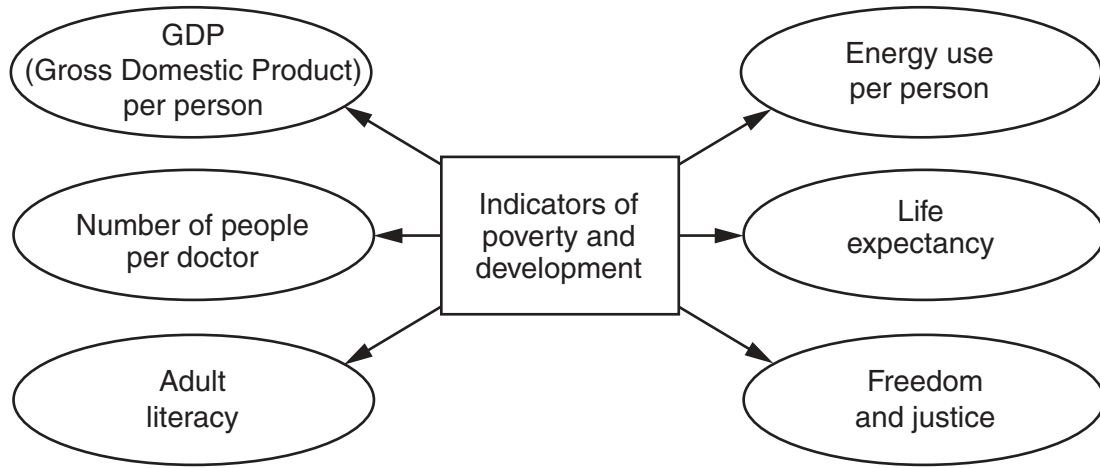


Fig. 2 for Question 1

Percentage increase in GDP per person in Kenya

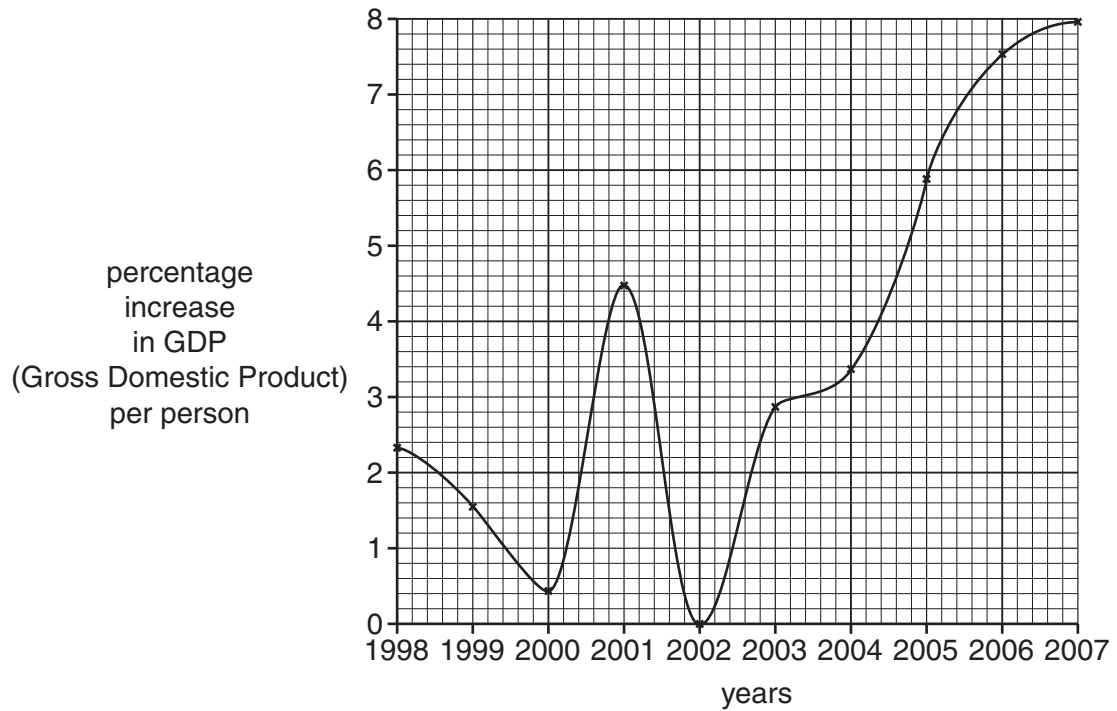


Fig. 3 for Question 1

An investigation was carried out in two different areas in the Makueni District, Wote and Kibwezi. Wote lies at a high altitude and experiences higher rainfall, whereas Kibwezi is in a lowland area with a dry climate. The level of development in the Makueni District is generally low, with unpaved roads throughout the area. The exception is the main Nairobi-Mombasa road which crosses Kibwezi. The majority of people get water directly from the rivers, dams and boreholes, or from tanks on their roofs.

For this study two villages each were chosen from Wote and Kibwezi. Three of the villages are less than three hours' walk away from a market.

Fig. 4A for Question 2

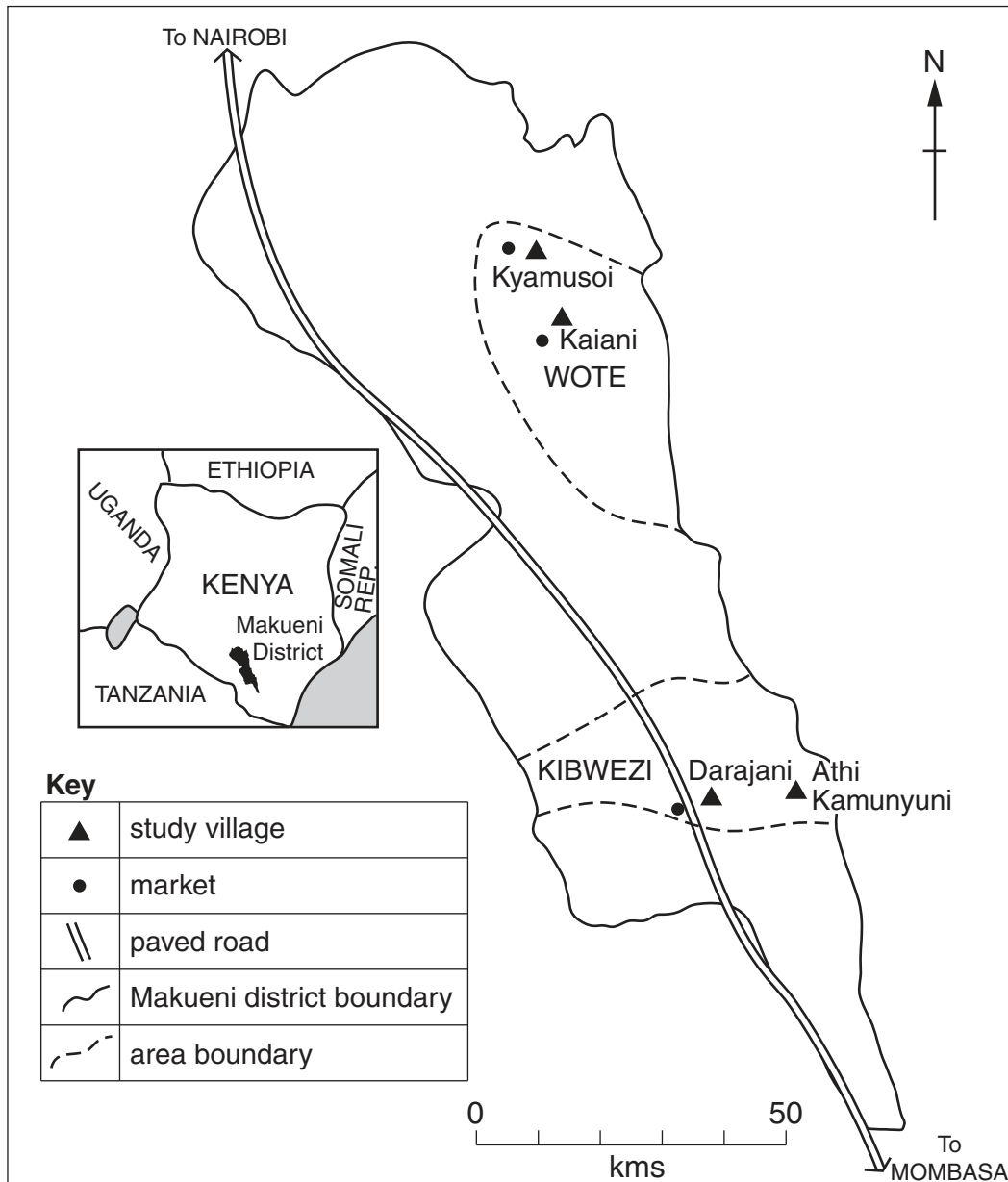


Fig. 4B for Question 2

Permission to reproduce items where third-party owned material protected by copyright is included has been sought and cleared where possible. Every reasonable effort has been made by the publisher (UCLES) to trace copyright holders, but if any items requiring clearance have unwittingly been included, the publisher will be pleased to make amends at the earliest possible opportunity.

University of Cambridge International Examinations is part of the Cambridge Assessment Group. Cambridge Assessment is the brand name of University of Cambridge Local Examinations Syndicate (UCLES), which is itself a department of the University of Cambridge.